







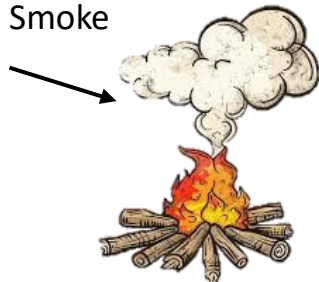








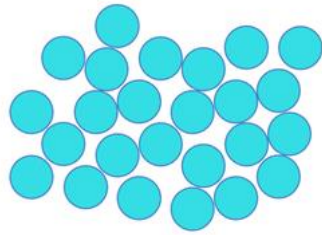
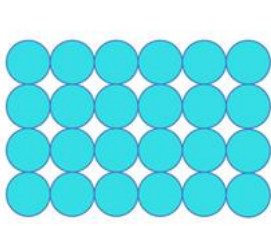
# States of Matter

## Activity Worksheet

1. Look at the items below and circle whether it is a solid, liquid or gas.

<p>a. Water</p>  <p>Solid      Liquid      Gas</p>	<p>b. TV</p>  <p>Solid      Liquid      Gas</p>	<p>c. Ice Cream</p>  <p>Solid      Liquid      Gas</p>
<p>d. Steam</p>  <p>Solid      Liquid      Gas</p>	<p>e. Car</p>  <p>Solid      Liquid      Gas</p>	<p>f. Helium inside the balloon</p>  <p>Solid      Liquid      Gas</p>
<p>g. Rain</p>  <p>Solid      Liquid      Gas</p>	<p>h. Apple</p>  <p>Solid      Liquid      Gas</p>	<p>i. Smoke</p>  <p>Solid      Liquid      Gas</p>
<p>j. Oxygen</p>  <p>Solid      Liquid      Gas</p>	<p>k. Glue</p>  <p>Solid      Liquid      Gas</p>	<p>l. Book</p>  <p>Solid      Liquid      Gas</p>

2. Which one is Solid, Liquid and Gas? Put the answer underneath.



3. Fill in the gaps with the words in the box below.

Liquid	Solid	Gas
Melt	Freeze	Boil

- If you melt a solid it turns into \_\_\_\_\_
- If you \_\_\_\_\_ water it turns into ice
- If you boil water, it turns into a \_\_\_\_\_
- A liquid can turn into a gas and a \_\_\_\_\_
- If you freeze gas it turns into a \_\_\_\_\_
- You can melt \_\_\_\_\_
- If you freeze a \_\_\_\_\_ it stays the same shape

4. Look around and find a Solid, Liquid or Gas and put them in the correct column.

Solid

Liquid

Gas